

Delhi Public School, Jammu

Revision Sheet (2016 - 17)

Topics : Measurement, Time, Money, Fraction , Tables, Mental maths

Name : _____

Class – II , Sec.: _____

Roll No. : _____

Subject : Mathematics

Q 1. Fill ups :

1. The power of a thing to hold or contain something is called _____ .
2. Body units of length are _____ , _____ and _____ .
3. _____ and _____ are used to measure weight.
4. We use _____ to separate rupees from paise.
5. A clock has a _____ and a _____ hand.
6. A fraction is a part of a _____ .

Q 2. Solve :

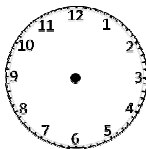
| | | | | | | | |
|-------|-------|-------|-------|-------|-------|-------|-------|
| 1. m | cm | 2. kg | g | 3. l | ml | 4. ₹ | p |
| 455 | 85 | 376 | 604 | 600 | 451 | 374 | . 80 |
| - 370 | 11 | + 239 | 375 | - 250 | 374 | - 109 | . 20 |
| _____ | _____ | _____ | _____ | _____ | _____ | _____ | _____ |

Q 3. Write in words :

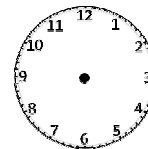
1. ₹ 209.30 _____
2. ₹ 1000 _____

Q 4. Draw hands and show the time :

1. Half past 1

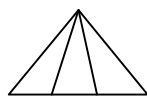


2. Quarter to 8

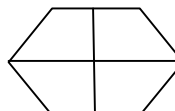


Q 5. Shade the figure according to the given fraction :

1. $\frac{2}{3}$



2. $\frac{3}{4}$



Q 6. True or false :

1. October is the 10th month of the year. ()
2. A two year child is 28 months old. ()
3. The correct value of 1litre is 1000ml. ()

Q 7. Write the unit to measure the length of the following :

1. Weight of a feather _____
2. Water in an aquarium _____
3. Distance from Jammu to Srinagar _____
4. A tablespoon of medicine _____

Q 8. Tick the correct option :

- Quarter to 4 can be written as
a. 3:45 b. 4:45 c. 4:15
- 6 kg is equal to
a. 600g b. 6000g c. 1000g
- 3 hours are equal to
a. 60 min b. 180 min c. 120 min

Q 9. Put the correct sign :

- 4 min _____ 240 sec
- $72 \text{ kg} \div 8 \text{ kg}$ _____ $42 \text{ kg} \div 7 \text{ kg}$
- 100 cm _____ 1 m

Q 10. Complete the grid :

| | | | | |
|---|---|---|---|---|
| X | 4 | 5 | 9 | 8 |
| 7 | | | | |
| 8 | | | | |
| 9 | | | | |

Q 11. Mental maths :

- One fourth of 20 is _____ .
- How many ₹ 10 notes are there in ₹ 170 ? _____ .
- 2 hours before 7 O'Clock is _____ .
- $75 \text{ p} + \text{_____} = ₹ 1$
- Leap year has _____ days.
- If one doll is for ₹ 50, four dolls will be for ₹ _____ .

Q 12. Problem solving :

- A tank has 829 litres 139 ml of water. 123 litres 220 ml water was drained out. How much water was left in the tank ?
- My mother bought 97 kg 350 g of vegetables and 20 kg 215 g of bakery items. What is the total weight?
- An electrician has 313 m 23 cm long wire. He buys 521 m 48 cm long wire. How much wire does he has in all ?
- Rohan has ₹ 700.50 . Out of this he spent ₹ 484.00 on a pair of shoes. How much money was left with him ?