

# Delhi Public School, Jammu

Session : 2024-25

## Assignment






Class : II

Month : October

Subject : Arithmetical Concepts

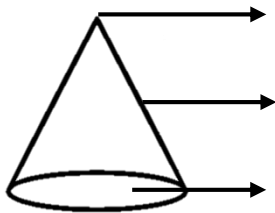
Topic : **Shapes and Patterns**

Q 1. Complete the table :

S.No.	Shape	Face	Corner	Edge
1.				
2.				
3.				
4.				
5.				

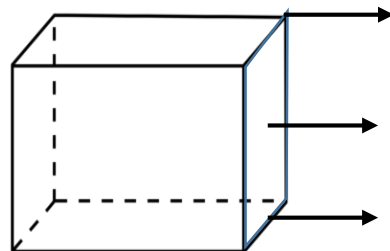
Q 2. Name the given shape, label it's parts and give one examples of each:

a.



e.g \_\_\_\_\_

b.



e.g \_\_\_\_\_

**Q 3. Guess the shape :**

a. I have 6 faces, 8 corners and 12 edges. I am made of rectangles.

I am a \_\_\_\_\_.

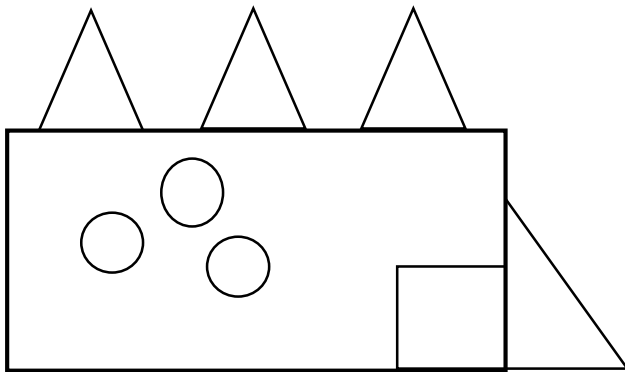
b. I have 4 sides and 4 corners. All sides of my shape are equal.

I am a \_\_\_\_\_.

c. I have 1 face, no edge and no corner. I am completely round. I

am a \_\_\_\_\_.

**Q 4. Count and Colour the shapes :**



Circles : \_\_\_\_\_

Square : \_\_\_\_\_

Triangles : \_\_\_\_\_

Rectangle : \_\_\_\_\_

**Q 5. Follow the pattern and complete the series :**

a. 100, 95, 90, \_\_\_\_\_, \_\_\_\_\_, \_\_\_\_\_, \_\_\_\_\_.

b. 300, 400, 500, \_\_\_\_\_, \_\_\_\_\_, \_\_\_\_\_, \_\_\_\_\_.

c. 2, 4, 8, \_\_\_\_\_, \_\_\_\_\_, \_\_\_\_\_, \_\_\_\_\_.

d. 48, 50, 52, \_\_\_\_\_, \_\_\_\_\_, \_\_\_\_\_, \_\_\_\_\_.