

Delhi Public School, Jammu

Session : 2024-25

Assignment

Class : II

Month : January

Subject : Arithmetical Concepts

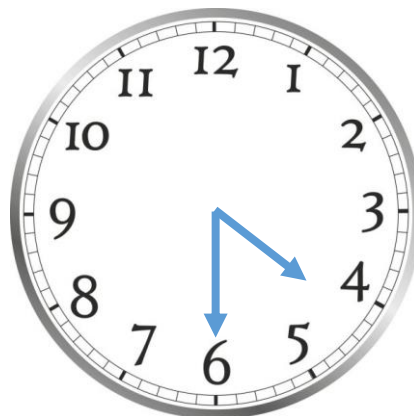
Topic : Time and Money

Q 1. Write the time shown in the clock :

a.




b.



Q 2. Draw hands and show the time :


a. 8 O'clock

8:00



b. Quarter to 3

2:45



Q 3. Fill in the blanks :

- a. A clock tells us time in _____ and _____.
- b. A calendar helps us to find _____, _____ and _____.
- c. Indian money consists of _____ and _____.
- d. The notes and coins we use are called _____.

Q 4. Solve :

$$\begin{array}{r} \text{a. ₹} \quad \text{P} \\ 15 \quad . \quad 25 \\ + \quad \underline{10 \quad . \quad 50} \\ \hline \end{array}$$

$$\begin{array}{r} \text{b. ₹} \quad \text{P} \\ 112 \quad . \quad 20 \\ + \quad \underline{325 \quad . \quad 30} \\ \hline \end{array}$$

$$\begin{array}{r} \text{c. ₹} \quad \text{P} \\ 445 \quad . \quad 65 \\ - \quad \underline{279 \quad . \quad 40} \\ \hline \end{array}$$

Q 5. Number stories :

a. Suraj had ₹152.50. His mother gave him ₹229.30. How much money does Suraj have now?

Sol.

b. Ankur buys a chocolate for ₹35. If he gives ₹100, how much money should he get back?

Sol.

