

Foundation Worksheet

Class : Prep

Subject : Arithmetical Concepts

Name : _____

Date : _____

I. Write 1 to 20.

--	--	--	--	--	--	--	--	--	--

--	--	--	--	--	--	--	--	--	--

II. What comes After.

3 ____

9 ____

7 ____

11 ____

14 ____

19 ____

What comes Inbetween.

2 ____ 4

18 ____ 20

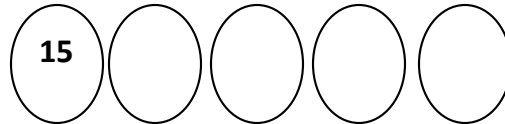
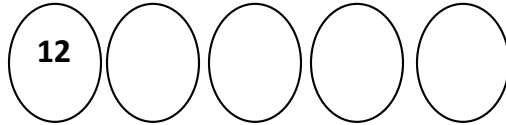
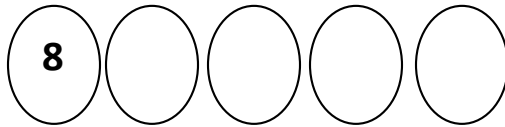
4 ____ 6

10 ____ 12


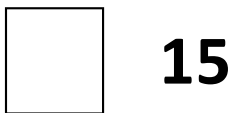
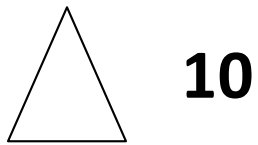
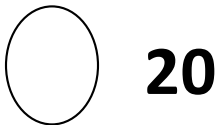
15 ____ 17

13 ____ 15

III. Complete the series.

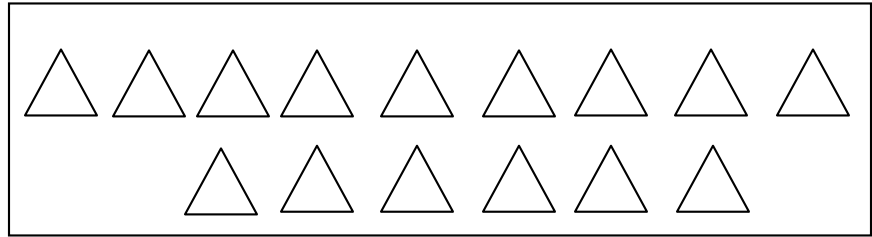


IV. Draw the pictures according to the number given below:-

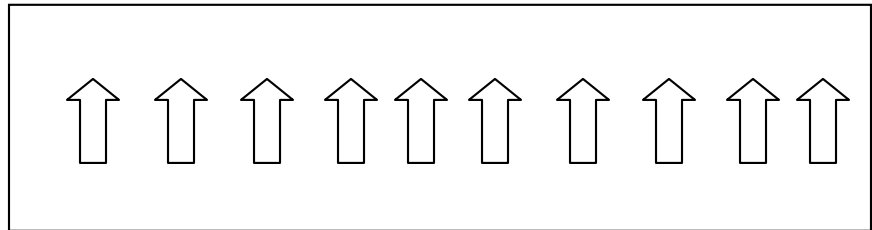


V. Colour the pictures as per the given number:-

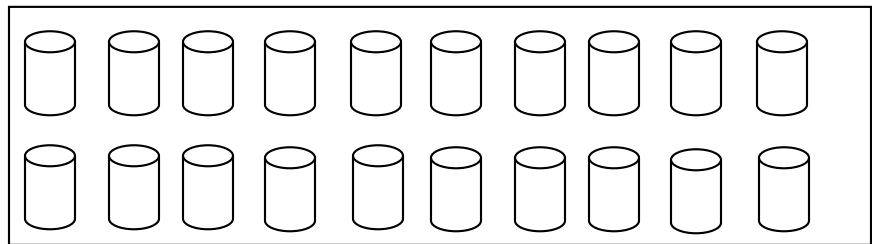
9




5



11



13



VI. Count the pictures and write the number in the given box :-

